


Date: _____

Pocket money spending

Solve money problems



Amber has bought:




How much has she spent?

$$\square + \square = \square$$



Tad has bought:




How much has he spent?

$$\square + \square = \square$$



Yee has bought:




How much has she spent?

$$\square + \square = \square$$



Rob has bought:



How much has he spent?

$$\square + \square = \square$$



Teacher's notes

Children work out the total for each character, then circle a combination of coins that they can use to pay exactly.