

Name: _____

Date: _____

End-of-unit Test | Unit 12

1 a) $54 \div 6 =$

b) $540 \div 6 =$

3 a) $350 \div 7 =$

b) $3500 \div 7 =$

2 a) $32 \div 4 =$

b) $3200 \div 4 =$

4 a) $72 \div 9 =$

b) $7200 \div 9 =$

1
2 marks

2
2 marks

3
2 marks

4
2 marks


Questions 5–8

Listen carefully. Your teacher will tell you which method to use to answer each of these calculations. Circle that method.

Estimate the answer to each calculation and write it in the cloud.


Then work out the answer. Show all your working.


5 $84 \div 3$ 
Partitioning
Formal method

6 $96 \div 4$ 
Partitioning
Formal method

5
3 marks

6
3 marks

7 $296 \div 8$ 
Partitioning
Expanded method
Formal method

8 $522 \div 6$ 
Partitioning
Expanded method
Formal method

7
3 marks

8
3 marks