

1 Write these amounts in litres.

a) 1600 ml =

b) 2600 ml =

c) 3480 ml =

d) 15750 ml =

1
4 marks

2 Write these amounts in millilitres.

a) 2.56 l =

b) 3.04 l =

c) 8.29 l =

d) 6.38 l =

2
4 marks

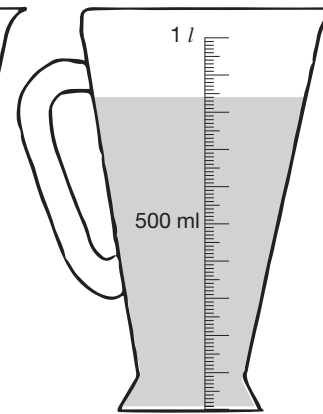
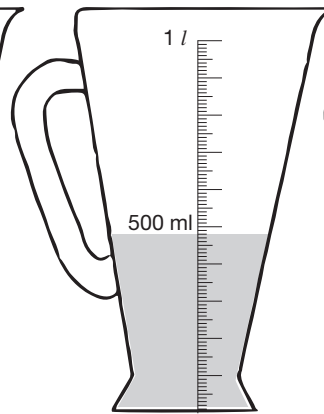
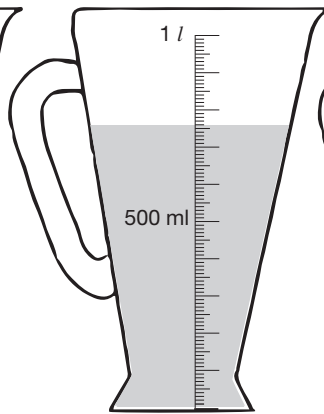
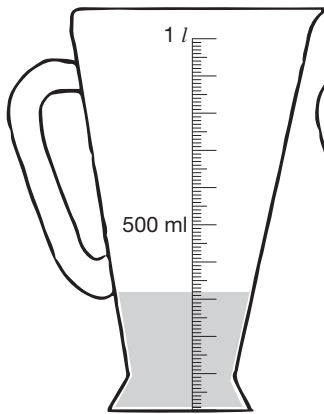
3 For each measuring jug, write (i) the volume of liquid in millilitres. Then (ii) round each volume to the nearest 100 ml.

a)

b)

c)

d)



i =

i =

i =

i =

ii =

ii =

ii =

ii =

3
8 marks

4 Complete the table.

Number of people	Orange concentrate	Water	Total
1	50 ml	250 ml	ml
2	ml	ml	ml
4	ml	l	l
6	ml	l	l

4
4 marks