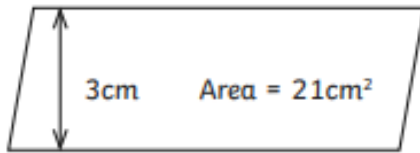


Area of Parallelograms

I can calculate the area of a parallelogram.

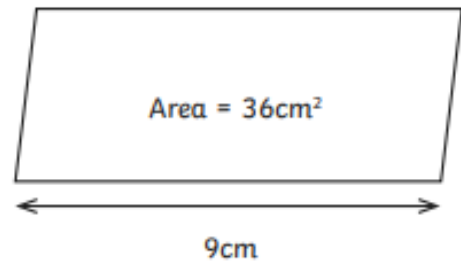
Calculate the base or height of each parallelogram from the measurements given.

1.



Base =

2.



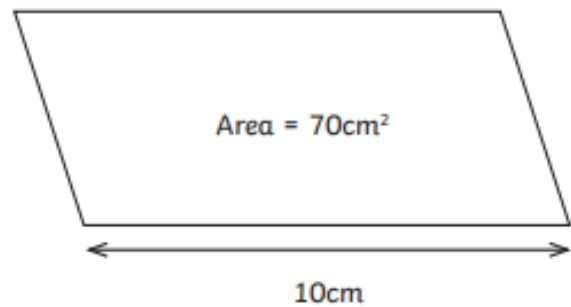
Height =

3.




Base =

4.



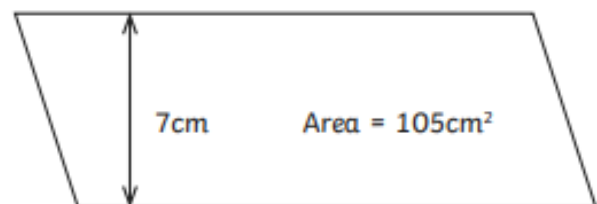
Height =

5.



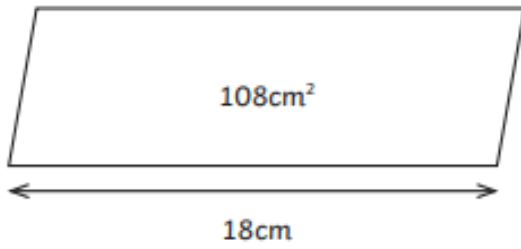
Base =

6.



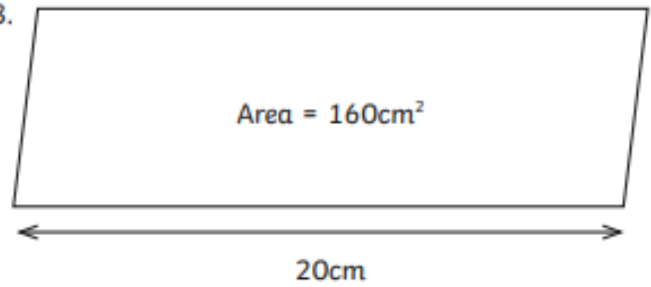
Base =

7.



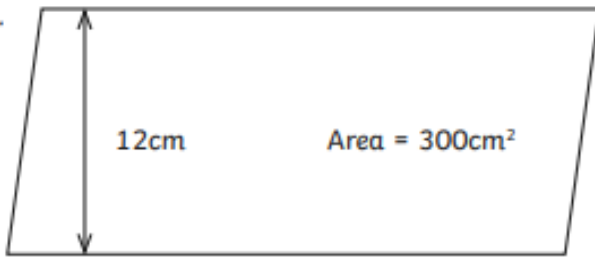
Height =

8.



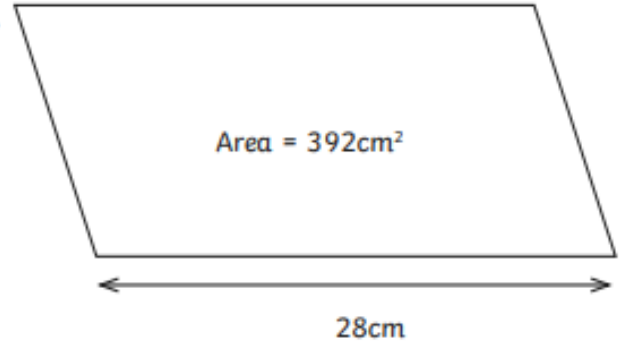
Height =

9.



Base =

10.



Height =

Number	Answer
1.	Base = 7cm
2.	Height = 4cm
3.	Base = 6cm
4.	Height = 7cm
5.	Base = 12cm
6.	Base = 15cm
7.	Height = 6cm
8.	Height = 8cm
9.	Base = 25cm
10.	Height = 14cm